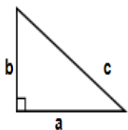
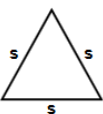
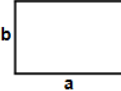


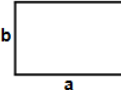
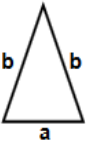


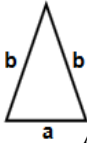
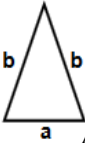
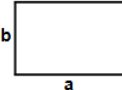
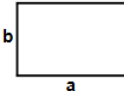
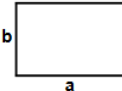
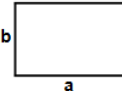
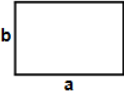

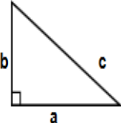
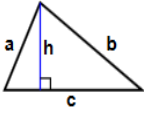

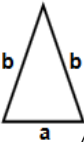


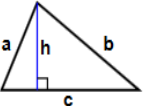




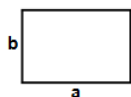
January 04, 2018

1)  Find area of triangle $a = 10$ ft, $b = 87$ ft Answer: _____	2)  Find perimeter of triangle $s = 50$ ft Answer: _____	3)  Find perimeter of rectangle having sides $a = 15$ m and $b = 3$ m Answer: _____
4)  Find area of rectangle having sides $a = 90$ in and $b = 76$ in Answer: _____	5)  Find perimeter of rectangle having sides $a = 47$ m and $b = 29$ m Answer: _____	6)  Find perimeter of rectangle having sides $a = 23$ cm and $b = 19$ cm Answer: _____
7)  Find area of triangle $a = 59$ in, $b = 83$ in Answer: _____	8)  Find perimeter of rectangle having sides $a = 56$ m and $b = 40$ m Answer: _____	9)  Find area of rectangle having sides $a = 100$ ft and $b = 98$ ft Answer: _____
10)  Find perimeter of triangle $a = 27$ m, $b = 48$ m Answer: _____	11)  Find perimeter of triangle $a = 15$ cm, $b = 86$ cm Answer: _____	12)  Find area of rectangle having sides $a = 81$ ft and $b = 51$ ft Answer: _____
13)  Find area of rectangle having sides $a = 97$ ft and $b = 79$ ft Answer: _____	14)  Find area of rectangle having sides $a = 74$ ft and $b = 48$ ft Answer: _____	15)  Find area of rectangle having sides $a = 30$ cm and $b = 2$ cm Answer: _____
16)  Find perimeter of rectangle having sides $a = 88$ cm and $b = 32$ cm Answer: _____	17)  Find perimeter of square having each side (s) equals 91 cm Answer: _____	18)  Find perimeter of triangle $a = 62$ ft, $b = 66$ ft, $c = 94$ ft Answer: _____
19)  Find perimeter of triangle $h = 89$, $a = 93$ cm, $b = 95$ cm, $c = 97$ cm Answer: _____	20)  Find area of square having each side (s) equals 27 ft Answer: _____	21)  Find perimeter of triangle $a = 21$ in, $b = 25$ in Answer: _____
22)  Find perimeter of square having each side (s) equals 56 cm Answer: _____	23)  Find perimeter of rectangle having sides $a = 55$ cm and $b = 16$ cm Answer: _____	24)  Find area of triangle $h = 45$ in, $a = 83$ in, $b = 99$ in, $c = 100$ in Answer: _____



January 04, 2018

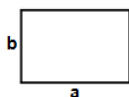
25)



Find area of rectangle having sides $a = 74$ in and $b = 49$ in

Answer: _____

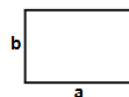
26)



Find area of rectangle having sides $a = 62$ ft and $b = 34$ ft

Answer: _____

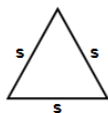
27)



Find perimeter of rectangle having sides $a = 71$ cm and $b = 22$ cm

Answer: _____

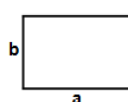
28)



Find perimeter of triangle $s = 48$ ft

Answer: _____

29)



Find perimeter of rectangle having sides $a = 64$ ft and $b = 63$ ft

Answer: _____

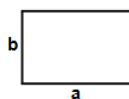
30)



Find perimeter of square having each side (s) equals 2 cm

Answer: _____


31)



Find perimeter of rectangle having sides $a = 60$ m and $b = 30$ m

Answer: _____

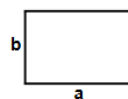
32)



Find area of square having each side (s) equals 8 cm

Answer: _____

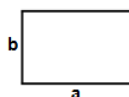
33)



Find area of rectangle having sides $a = 75$ cm and $b = 13$ cm

Answer: _____

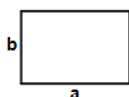
34)



Find perimeter of rectangle having sides $a = 78$ cm and $b = 72$ cm

Answer: _____

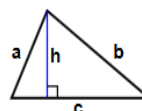
35)



Find area of rectangle having sides $a = 83$ in and $b = 76$ in

Answer: _____


36)



Find area of triangle $h = 62$ m, $a = 78$ m, $b = 82$ m, $c = 83$ m

Answer: _____


37)



Find perimeter of square having each side (s) equals 55 cm

Answer: _____

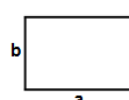
38)



Find area of square having each side (s) equals 43 cm

Answer: _____

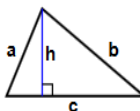
39)



Find perimeter of rectangle having sides $a = 69$ cm and $b = 16$ cm

Answer: _____


40)



Find area of triangle $h = 81$ ft, $a = 87$ ft, $b = 100$ ft, $c = 101$ ft

Answer: _____

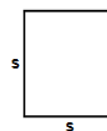
41)



Find perimeter of square having each side (s) equals 78 m

Answer: _____


42)



Find area of square having each side (s) equals 89 cm

Answer: _____

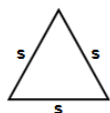
43)



Find area of square having each side (s) equals 64 cm

Answer: _____

44)



Find perimeter of triangle $s = 45$ ft

Answer: _____

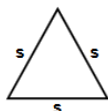
45)



Find area of square having each side (s) equals 4 m

Answer: _____


46)



Find perimeter of triangle $s = 19$ m

Answer: _____

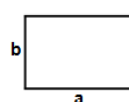
47)



Find perimeter of square having each side (s) equals 18 ft

Answer: _____

48)

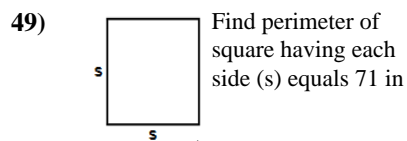


Find perimeter of rectangle having sides $a = 100$ cm and $b = 99$ cm


Answer: _____




January 04, 2018



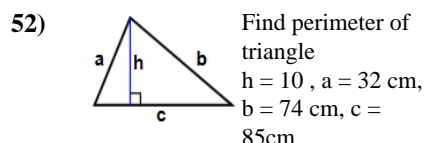
Answer: _____



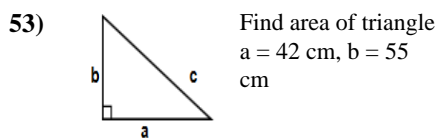
Answer: _____



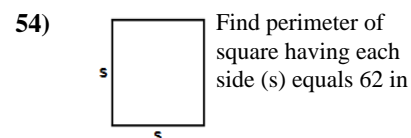
Answer: _____



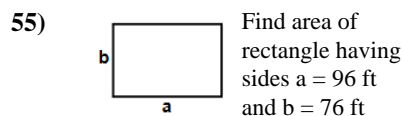
Answer: _____



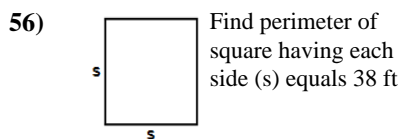
Answer: _____



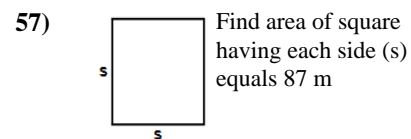
Answer: _____



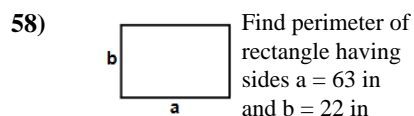
Answer: _____



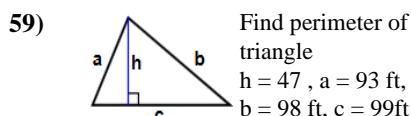
Answer: _____



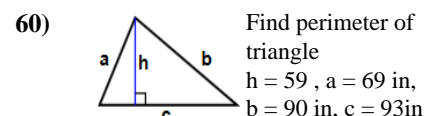
Answer: _____



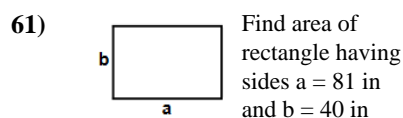
Answer: _____



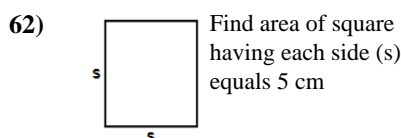
Answer: _____



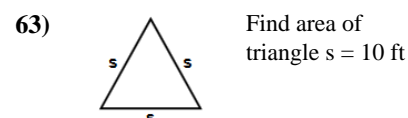
Answer: _____



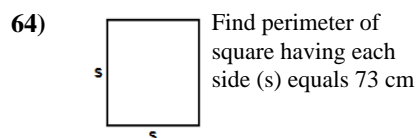
Answer: _____



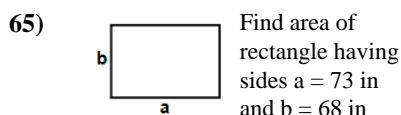
Answer: _____




Answer: _____



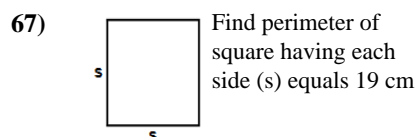
Answer: _____



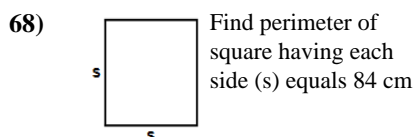
Answer: _____



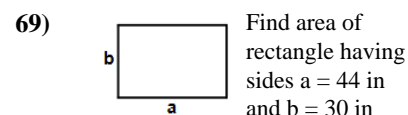
Answer: _____



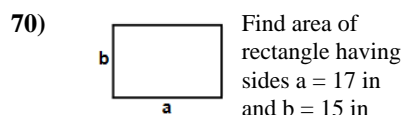
Answer: _____



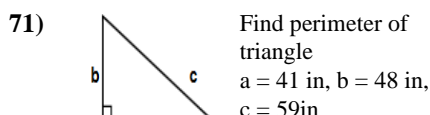
Answer: _____



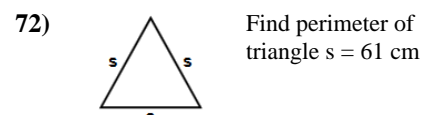
Answer: _____



Answer: _____



Answer: _____



Answer: _____



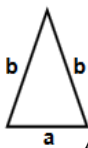
January 04, 2018

- 73) Find perimeter of square having each side (s) equals 33 ft



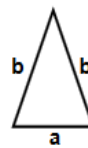
Answer: _____

- 74) Find perimeter of triangle
a = 85 ft, b = 91 ft



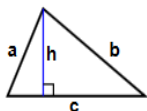
Answer: _____

- 75) Find perimeter of triangle
a = 71 m, b = 81 m



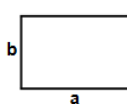
Answer: _____

- 76) Find perimeter of triangle
h = 18, a = 51 in,
b = 83 in, c = 91 in



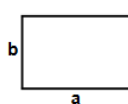
Answer: _____

- 77) Find area of rectangle having sides a = 83 in and b = 47 in



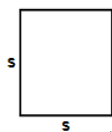
Answer: _____

- 78) Find perimeter of rectangle having sides a = 73 cm and b = 9 cm



Answer: _____

- 79) Find perimeter of square having each side (s) equals 30 ft



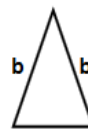
Answer: _____

- 80) Find perimeter of square having each side (s) equals 84 ft



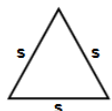
Answer: _____

- 81) Find area of triangle
a = 12 in, b = 42 in



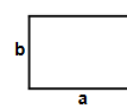
Answer: _____

- 82) Find perimeter of triangle s = 34 in



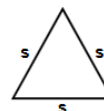
Answer: _____

- 83) Find perimeter of rectangle having sides a = 70 m and b = 61 m



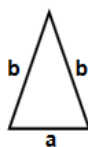
Answer: _____

- 84) Find perimeter of triangle s = 16 ft



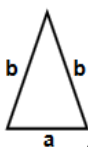
Answer: _____

- 85) Find perimeter of triangle
a = 91 m, b = 94 m



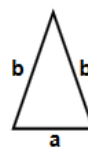
Answer: _____

- 86) Find area of triangle
a = 63 m, b = 71 m



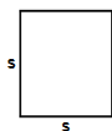
Answer: _____

- 87) Find perimeter of triangle
a = 38 in, b = 69 in



Answer: _____

- 88) Find perimeter of square having each side (s) equals 11 m



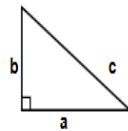
Answer: _____

- 89) Find area of square having each side (s) equals 30 ft



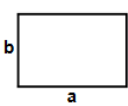
Answer: _____

- 90) Find perimeter of triangle
a = 60 m, b = 88 m,
c = 93 m




Answer: _____

- 91) Find perimeter of rectangle having sides a = 89 m and b = 65 m



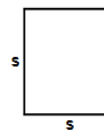
Answer: _____

- 92) Find perimeter of square having each side (s) equals 98 cm



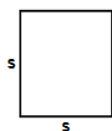
Answer: _____

- 93) Find area of square having each side (s) equals 71 in



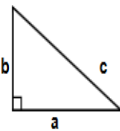
Answer: _____

- 94) Find area of square having each side (s) equals 61 ft



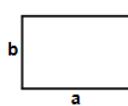
Answer: _____

- 95) Find area of triangle
a = 57 ft, b = 62 ft



Answer: _____

- 96) Find perimeter of rectangle having sides a = 83 in and b = 6 in



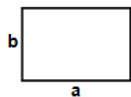
Answer: _____

Name: _____



January 04, 2018

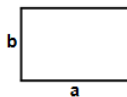
97)



Find perimeter of rectangle having sides $a = 78$ cm and $b = 48$ cm

Answer: _____

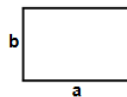
98)



Find perimeter of rectangle having sides $a = 92$ ft and $b = 64$ ft

Answer: _____

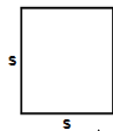
99)



Find area of rectangle having sides $a = 29$ in and $b = 15$ in

Answer: _____

100)



Find perimeter of square having each side (s) equals 82 ft

Answer: _____

Total: ____ / 100

Name: _____



January 04, 2018

Answers:

- | | | | | | | |
|------------|----------------------|--------------|----------------------|------------|------------|-----------------------|
| 1) 435ft | 2) 150ft | 3) 36m | 4) 6840in | 5) 152m | 6) 84cm | 7) 1507.3172152868in |
| 8) 192m | 9) 9800ft | 10) 123m | 11) 187cm | 12) 4131ft | 13) 7663ft | 14) 3552ft |
| 15) 60cm | 16) 240cm | 17) 364cm | 18) 222ft | 19) 285cm | 20) 729ft | 21) 71in |
| 22) 224cm | 23) 142cm | 24) 2227.5in | 25) 3626in | 26) 2108ft | 27) 186cm | 28) 144ft |
| 29) 254ft | 30) 8cm | 31) 180m | 32) 64cm | 33) 975cm | 34) 300cm | 35) 6308in |
| 36) 2542m | 37) 220cm | 38) 1849cm | 39) 170cm | 40) 4050ft | 41) 312m | 42) 7921cm |
| 43) 4096cm | 44) 135ft | 45) 16m | 46) 57m | 47) 72ft | 48) 398cm | 49) 284in |
| 50) 284in | 51) 230in | 52) 191cm | 53) 1155cm | 54) 248in | 55) 7296ft | 56) 152ft |
| 57) 7569m | 58) 170in | 59) 290ft | 60) 252in | 61) 3240in | 62) 25cm | 63) 43.301270189222ft |
| 64) 292cm | 65) 4964in | 66) 122in | 67) 76cm | 68) 336cm | 69) 1320in | 70) 255in |
| 71) 148in | 72) 183cm | 73) 132ft | 74) 267ft | 75) 233m | 76) 225in | 77) 3901in |
| 78) 164cm | 79) 120ft | 80) 336ft | 81) 62.35382907248in | 82) 102in | 83) 262m | 84) 48ft |
| 85) 279m | 86) 1718.6274138102m | 87) 176in | 88) 44m | 89) 900ft | 90) 241m | 91) 308m |
| 92) 392cm | 93) 5041in | 94) 3721ft | 95) 1767ft | 96) 178in | 97) 252cm | 98) 312ft |
| 99) 435in | 100) 328ft | | | | | |